

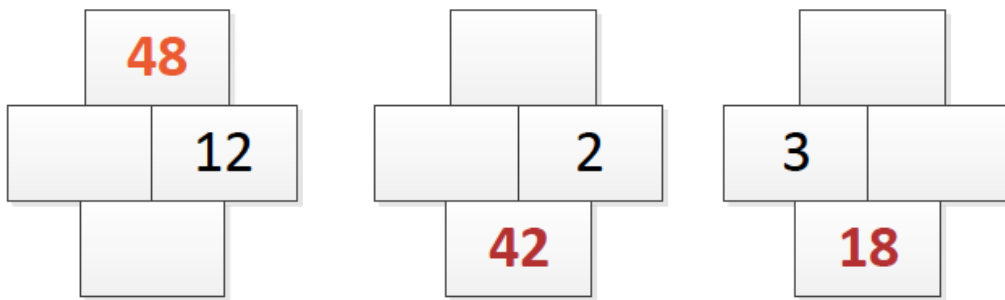
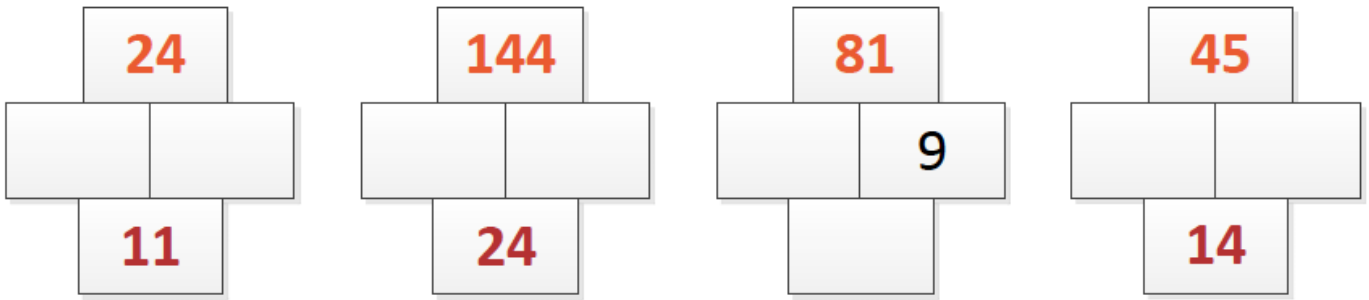
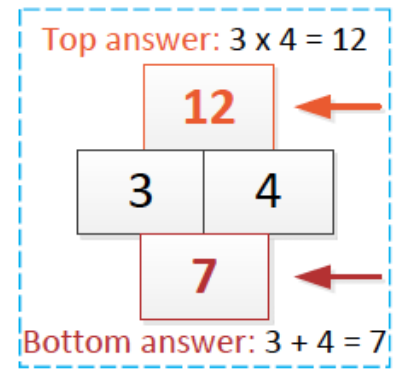
ADD & MULTIPLY PUZZLES

The 2 numbers in the middle


Add together to make the answer in the bottom box. In this example $3 + 4 = 7$

Are multiplied to give the answer in the top box. In this example $3 \times 4 = 12$

TRY THESE. The 1st 2 examples are to get you started. The next few will make you think a little more.



Now, make up some of your own.



MULTIPLICATION SQUARES

Multiply the numbers across the top with the numbers down the side. One example has been done e.g. $3 \times 20 = 60$. In the last one, you are given some answers and you need to work out the numbers for the row and column.

x	2	5	3
20			60
10			

x	4	5	2
25			
15			

x	3		5
	60		
10		20	

x	4	5	2	3	5	10	0
5							
3		15					
1							
0							
2							0
10					50		