

NAAM

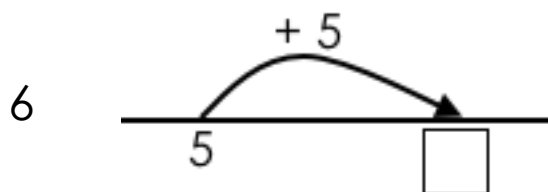
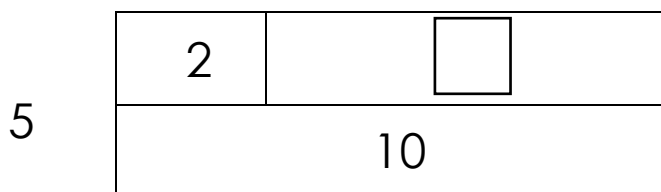
PART ONE
2 MINUTES FOR THIS PAGE

1 $7 + 3 = \square$

2 $2 + 8 = \square$

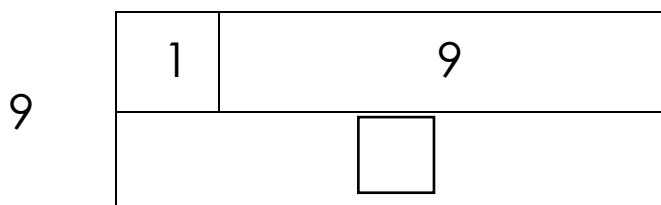
3 $10 = 7 + \square$

4 8 minder as 10 is \square



7 $10 - 5 = \square$

8 $10 - 4 = \square$



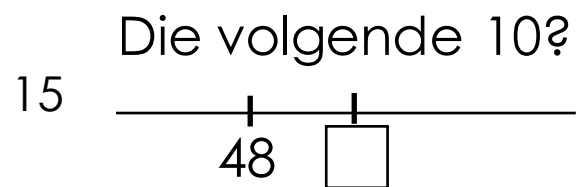
10 $\square + 2 = 10$

11 $50 + 6 = \square$

12 $60 + 3 = \square$

13 $40 + 8 = \square$

14 $40 - 7 = \square$



16 $100 + 27 = \square$



18 $\square + 8 = 50$

19 $30 - \square = 27$

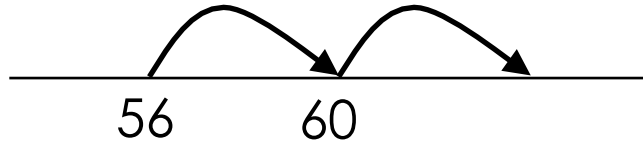
20 $87 = 80 + \square$

Total out of 20:

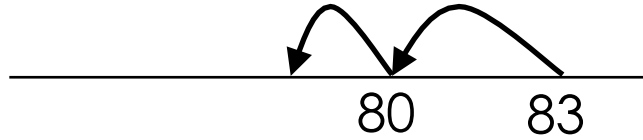
PAGE INTENTIONALLY BLANK

PART TWO
1 MINUTE FOR THIS PAGE

1 $56 + 8 = \square$



2 $83 - 4 = \square$



3 $93 - 7 = \square$

4 $67 + \square = 73$

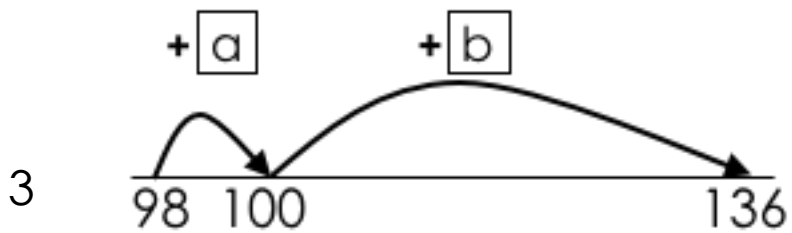
5 $\square + 7 = 82$

Total out of 5:

PART THREE
1 MINUTE FOR THIS PAGE

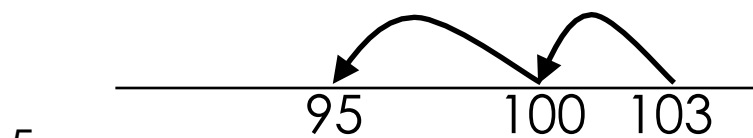
1 $67 + 5 = 67 + 3 + \square$

2 $98 + 56 = 98 + 2 + \square$



$98 + \square + \square = 136$

4 $96 + \square = 96 + 4 + 32$



$103 - \square = 95$

Total out of 5: